

- ★★ 1. Karen, Joe and Keesha are playing a game.



Karen has 15 points.  
Keesha has 10 more points than Karen.  
Joe has 5 points less than Keesha.




How many points do Joe and Keesha have?

Answer: Joe has \_\_\_\_\_ points.

Keesha has \_\_\_\_\_ points.

- ★★★★ 2. How much does an apple cost?


 +  = 50¢

 +  +  = 60¢


Answer: \_\_\_\_\_ ¢

- ★★★ 3. An angle is a corner where two straight lines meet.  
How many angles are there in the sale tag to the right?

Answer: \_\_\_\_\_ angles



- ★★★★ 4. Jane, Bill, Tom and Sue went to the school carnival. Jane won 4 prizes. Bill won 2 prizes. Tom did not win a prize. Sue won 6 prizes. Use the key to make the right number of happy faces for each child.



Jane	
Bill	
Tom	
Sue	

Key: 2 prizes = 😊

- ★★ 5. Roll a die 20 times. Make a tally mark each time below the face that lands 'up'. Circle the face that comes up most often.


- ★★★ 6. Practice adding in your head on the problems below. Find numbers that add to ten. This will make your work easy.

6	7	9	2	5	8	1	3
2	1	8	5	6	9	3	4
8	3	1	5	1	2	7	6
4	9	5	2	4	1	6	8
<u>+1</u>	<u>+2</u>	<u>+3</u>	<u>+3</u>	<u>+7</u>	<u>+4</u>	<u>+2</u>	<u>+7</u>

When you turn in your paper, you will have a problem like this to do in your head. Put your answer here: